

DAV PUBLIC SCHOOL BALLABHGARH

SUMMER HOLIDAY H.W

CLASS-III

SESSION-2021-22

- Complete the given Art Integrated Project Work.
- Submit the work in the first week of July.
- Learn and revise the work done in class till now in all subjects.

हिंदी

पाठ - 1 से 8 पाठ तक वाचन

पाठ -1,3, 5,6,7 श्रुतलेख

(प्रतिदिन 20शब्द लेकर अभिभावक से चैक कराकर जो शब्द

गलत है, उसका संशोधन कार्य करोगे। कार्य सुन्दर लेख और मात्राओं का ध्यान रखते हुए करना है।**इस कार्य के लिए एक

अलग छोटी कापी बनानी है।**

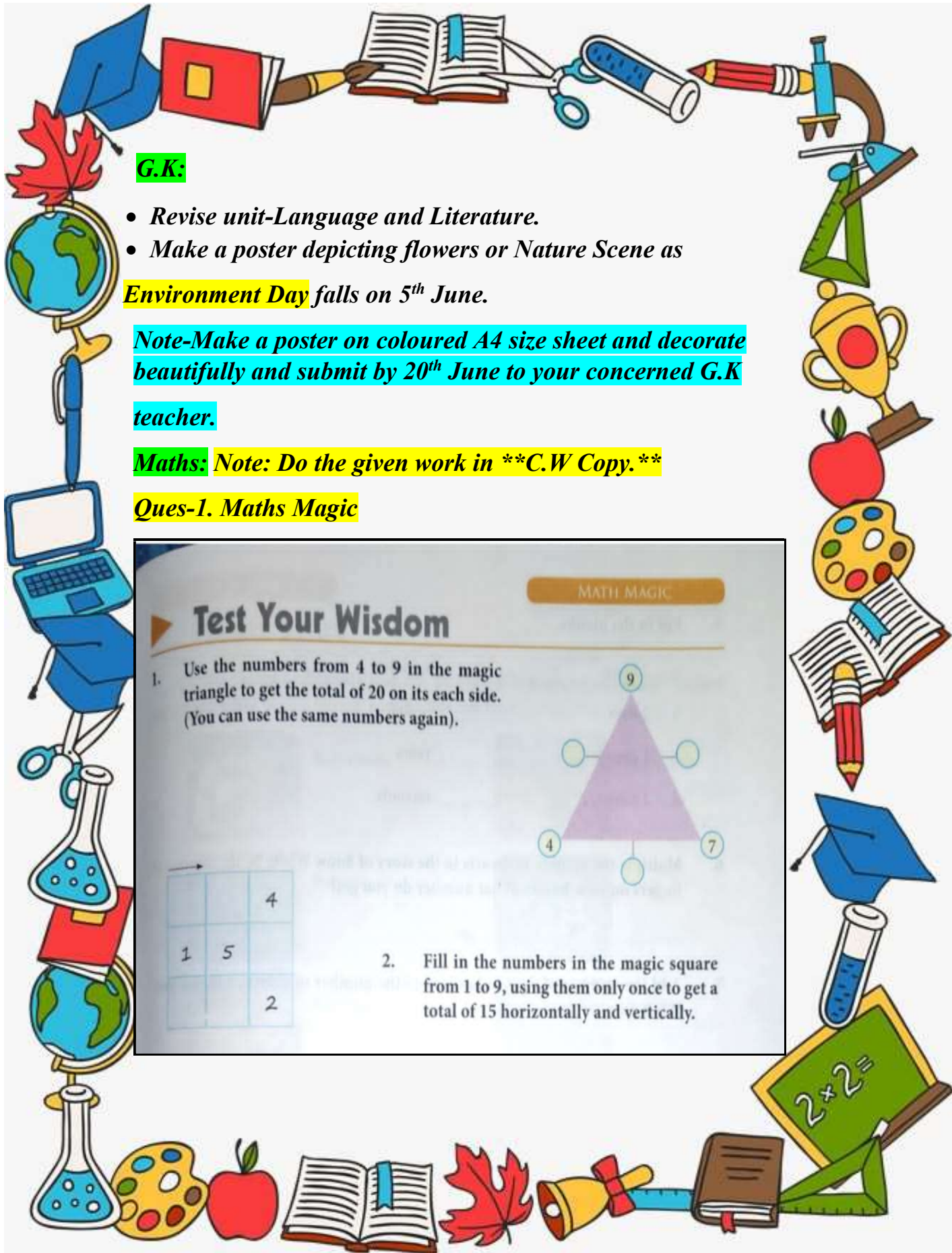
नैतिक शिक्षा

1. प्रार्थना कविता (मौखिक)

2 . आर्य समाज के नियम(पहला, तीसरा)(नियम याद कीजिए।)

**नोट-इसके अतिरिक्त प्रतिदिन एक शिक्षा प्रद

कहानी पढ़िए।**



G.K:

- *Revise unit-Language and Literature.*
- *Make a poster depicting flowers or Nature Scene as Environment Day falls on 5th June.*

Note-Make a poster on coloured A4 size sheet and decorate beautifully and submit by 20th June to your concerned G.K teacher.


Maths: Note: Do the given work in **C.W Copy.**

Ques-1. Maths Magic

MATH MAGIC

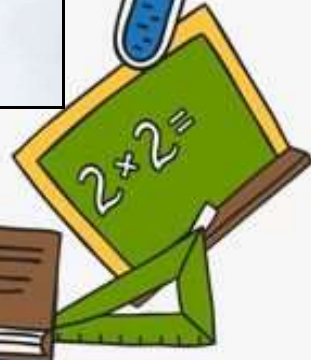
Test Your Wisdom

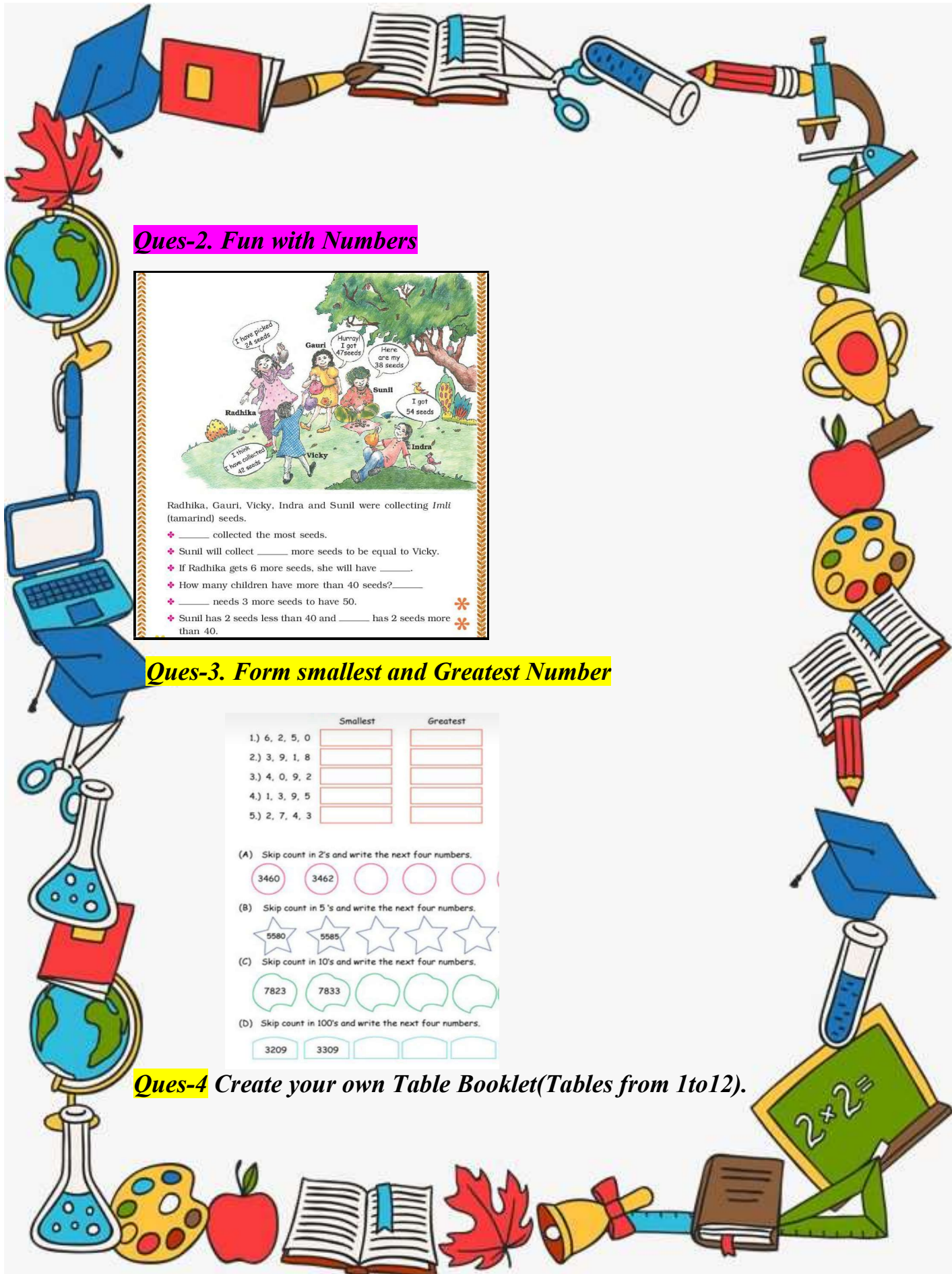
1. Use the numbers from 4 to 9 in the magic triangle to get the total of 20 on its each side. (You can use the same numbers again).



2. Fill in the numbers in the magic square from 1 to 9, using them only once to get a total of 15 horizontally and vertically.

		4
1	5	
		2





Ques-2. Fun with Numbers

Radhika, Gauri, Vicky, Indra and Sunil were collecting *Imli* (tamarind) seeds.

- ✦ _____ collected the most seeds.
- ✦ Sunil will collect _____ more seeds to be equal to Vicky.
- ✦ If Radhika gets 6 more seeds, she will have _____.
- ✦ How many children have more than 40 seeds? _____
- ✦ _____ needs 3 more seeds to have 50.
- ✦ Sunil has 2 seeds less than 40 and _____ has 2 seeds more than 40.

Ques-3. Form smallest and Greatest Number

	Smallest	Greatest
1.) 6, 2, 5, 0	<input type="text"/>	<input type="text"/>
2.) 3, 9, 1, 8	<input type="text"/>	<input type="text"/>
3.) 4, 0, 9, 2	<input type="text"/>	<input type="text"/>
4.) 1, 3, 9, 5	<input type="text"/>	<input type="text"/>
5.) 2, 7, 4, 3	<input type="text"/>	<input type="text"/>

(A) Skip count in 2's and write the next four numbers.
 3460 3462

(B) Skip count in 5's and write the next four numbers.
 5580 5585

(C) Skip count in 10's and write the next four numbers.
 7823 7833

(D) Skip count in 100's and write the next four numbers.
 3209 3309

Ques-4 Create your own Table Booklet(Tables from 1to12).





ART INTEGRATED PROJECT

(A project that includes more than one subject and 'teaches through the arts.')

TOPIC – OUR FOOD

Guidelines -

- **Please follow the guidelines enlisted below for the multidisciplinary project work.**

**** Think out of the box and make your project creative ,unique and meaningful.****

- *Make the project on A4 pastel sheets .*
- *Convert the project in PDF form and submit it to the class teacher.*

PROJECT FILE

Cover page – ART INTEGRATED PROJECT

TOPIC – OUR FOOD

Name , Class / Section and Roll no.

Page 1 - Index

Page 2 – Acknowledgement

- *I would like to express my gratitude to my teachers for providing me the opportunity to do the project on the Topic 'Our Food '.*
- *This project has not only enabled me to know the food consumption of my house, the amount spend on that on daily basis but has also enriched my knowledge about the food specialty of my state as well as different states of India and developed a sense of pride of being part of India.*
- *I would also like to thank my parents and friends for supporting me in completing the project.*



Page 3&4 - English

Make a collage using 5 –7 pictures of the food items being eaten in the state of Haryana. Write a paragraph on the same in about 60 – 80 words.

Page 5&6- हिंदी

हरियाणा के पारम्परिक भोजन के छह चित्र चिपकाकर उनका नाम हिन्दी में लिखना ।

- साज सज्जा के साथ कार्य करना।
- गतिविधि करते समय अंग्रेज़ी शब्द का प्रयोग न किया जाए।

Page -7 Maths

Collect the data for the month of June & Complete the given table:

S.NO	Food Item	Total Consumption	Total Cost
1	Milk		
2	Fruits & Vegetables		
3	Pulses		
4	Rice		
5	Wheat flour		
6.	Total		

Page-8&9 G.sc.

1. Draw this Healthy Meal Plate and paste any 5 healthy food items on it.



Page-10&11 S.sc.

1. Name and Paste the pictures of the food specialty/cuisine of given five states. Write the name of cuisine which one is yours favourite from out of it .

- a. Maharashtra- Pav Bhaji*
- b. Rajasthan- Dal Bati Churma*
- c. Gujarat - Dhokla*
- d. Kerala - Idli -Dosa with Sambhar*
- e. West Bengal- Fish and Rice*

Page -12 BIBLIOGRAPHY –

Mention the sources (Books and You tube links) from which you have collected the information.
